

The Regeneration of London's Docklands

Guided walk, field survey and gallery study: Support activities

Key Stage 4 Study Day


This pack includes:

- West India Quay land use survey
- Museum Gallery Study: New Port, New City
- Museum Gallery Study: River, Port and People

Please photocopy enough sheets for each student to have one set each.
They will need clipboards and pens/pencils.



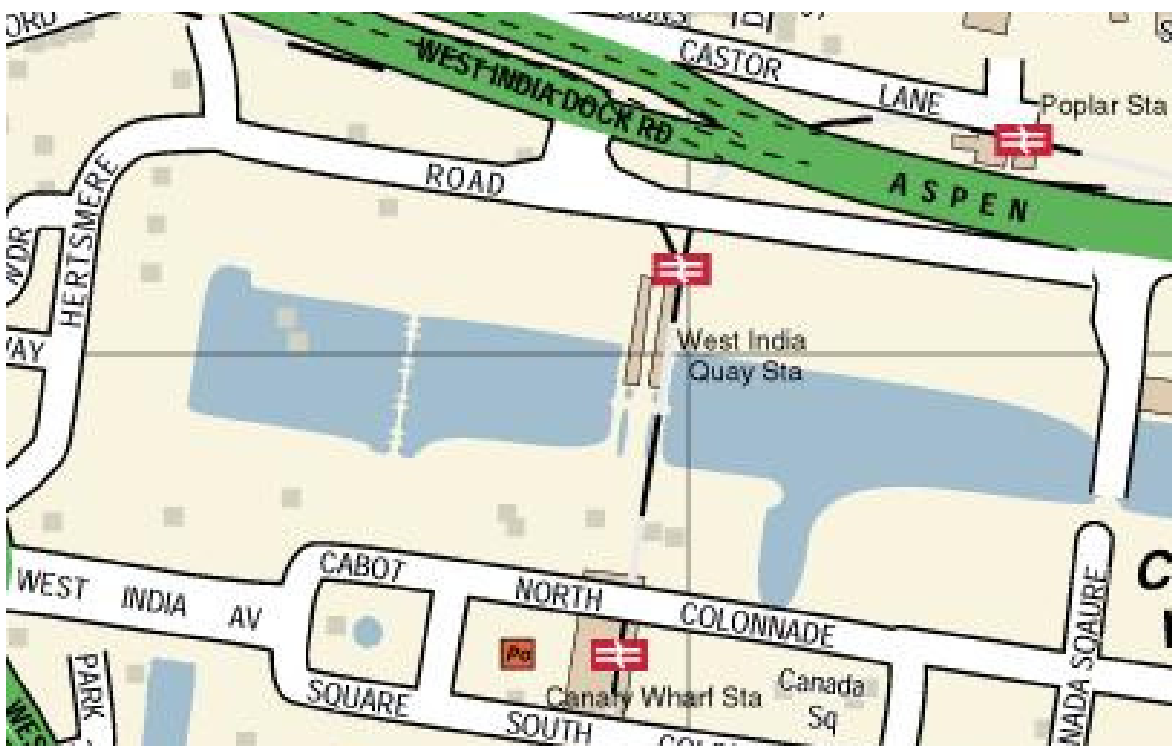
**MUSEUM
IN DOCKLANDS**



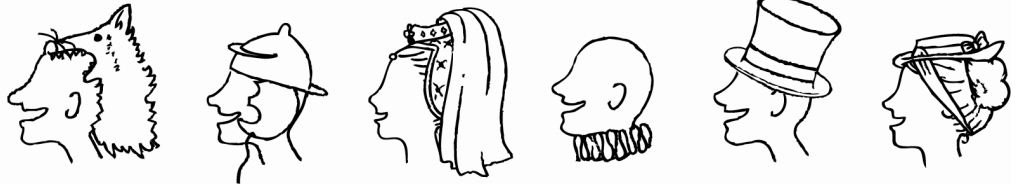
West India Quay Survey

- For this survey you will need to study the Quay site on both sides, from the DLR line to the west end of the dock.
- You may like to use cameras to record information.

Land use at the Quay



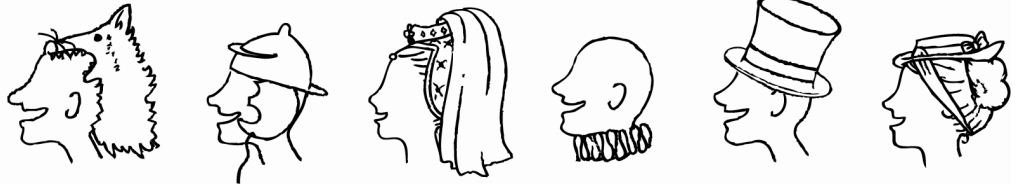
1. Draw rectangles / squares on the map above to represent the buildings around the West India Quay. Shade them to show the **different land uses** of the West India Quay today. Draw a key to explain your shading in the space below (e.g. diagonal lines = residential use). N.B. Some buildings may have more than one use!




2. In the box below, make a site sketch of a portion of the Quay which shows several different land uses.

(Remember: a site sketch is a **simplified** drawing which just shows the outlines of different features. You should include labels).

A large, empty rectangular box with a thin black border, intended for the student to draw a site sketch of a portion of the Quay showing different land uses.



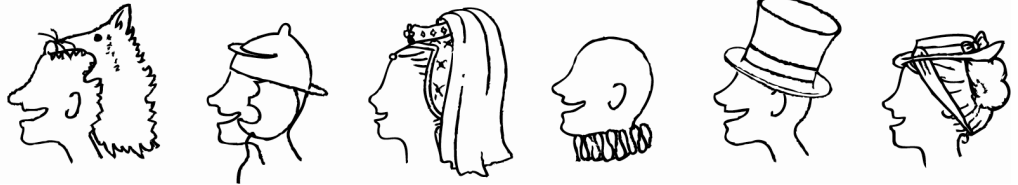
3. Choose **five** premises around the Quay (e.g. DLR station, Museum, office block).
Complete the diagram below to show how they are interdependent.



New development around the Quay

4. How can you tell that some buildings are new developments?

5. What are the **primary** uses of these new developments?



Transport

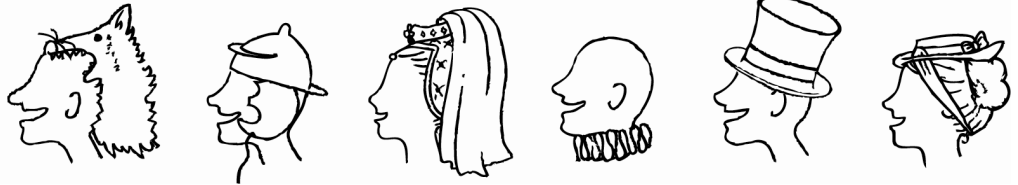
6. What are the **three** main forms of transport to and from the Quay?

i.

ii.

iii.

7. Why are the transport needs in the Docklands area different to some other parts of London?



The docks in the past


8. What was the original use of the West India Quay area?

9. Why has the land use of this area changed?

10. What were the quayside buildings used for in the past?

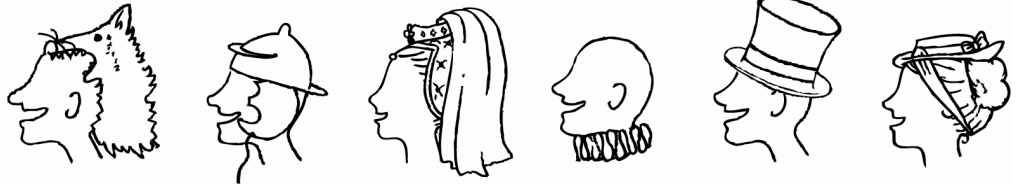
11. Draw something in the box below which is evidence of the use of the Quay in the past.





12. What other examples are there of evidence from the past?

13. Why do you think things from the past have been preserved?



Shopping at West India Quay

14. Complete the table by listing the names of **five** businesses using the warehouses today. The first example has been done for you.

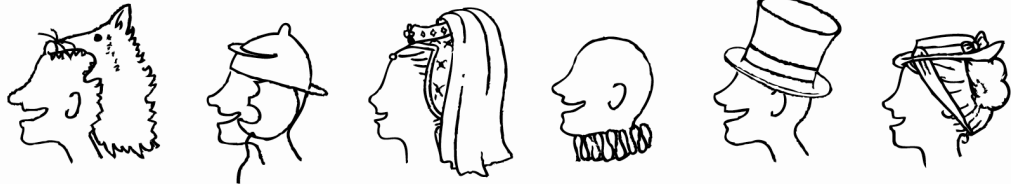
Name of business	Type of business	Uses for the business
Browns	Restaurant	Entertainment, business meetings

15. Investigate the shops inside the warehouse. List **three** types of goods/ services that are being sold.

i.

ii.


iii.



16. Look inside one of the shops or in the window at a price list. Choose **three** items/ services and log the item and price in the table below.

When you return to your local area, log the same items and prices.

Item	Price in Docklands	Price in
	



Museum Gallery Study: New Port, New City

This gallery tells the story of the decline of the docks and related industries in the late 1960s and 1970s, leading to the dereliction of the Docklands area. It explores the economic and social changes which accompanied its regeneration as London's second business district in the late 20th century.

Start at the beginning of the gallery. Explore the whole gallery before starting to complete the worksheet.

1. Explain the **main** reason for the decline of the docks.

.....

.....

.....

2. List **three** other factors that contributed to the dock closures.

.....

.....


.....

3. How did the dock closures affect local residents and businesses?

.....

.....

.....



4. What do the letters LDDC stand for?

.....

5. What problems did the Docklands area face in 1981, the year the LDDC was created?

.....

.....

.....

6. What was the **aim** of the LDDC and **how** did it plan to achieve this aim?

.....

.....


.....

7. What was the Enterprise Zone? What incentives were offered to developers to build in the Zone?

.....

.....

.....



8. How was the Canary Wharf proposal and development **different** to the original plans for the Docklands area?

.....

.....

.....

9. List **three** ways in which transport links to the Docklands area were improved.

.....

.....

.....

10. Why were these so important to the success of the regeneration scheme?

.....

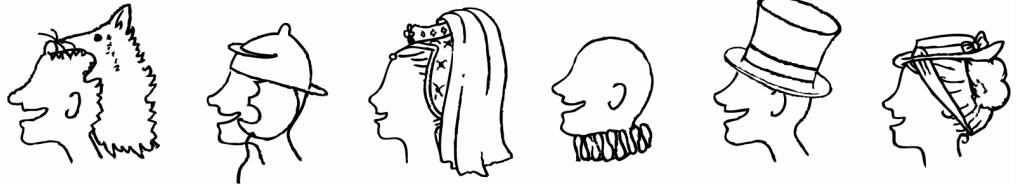
.....

11. In what other ways did the LDDC improve the infrastructure of the Docklands area?

.....

.....

.....



12. What problems were there with local housing in the 1980s?

.....

.....

13. To what extent were these solved by the regeneration?

.....

.....

14. Find out about **two** organisations, or individuals, who **opposed** the LDDC and property developers. Explain their point of view below.

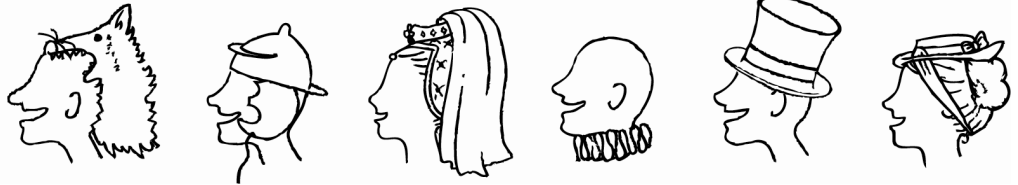
.....

.....

.....

.....

.....



15. Use the whole gallery to evaluate the **successes** and **failures** of the LDDC by the time it disbanded in 1998.

Successes	Failures



Use this page to make additional notes or sketches.